

**JINDAL DARSH BHARTI HR. SEC.
SCHOOL, KIRODIMAL NAGAR**



**SESSION – 2026-27
SUMMER VACATION
HOME WORK
CLASS – 5TH**

WEEK - 01 DAY - 01 (MONDAY - 04.05.2026)	
S.NO.	
	ENGLISH - ANIMAL CROSSWORD
	HINDI - *H -worksheet 1* *Reading Skill (पठन कौशल)* *1. अनुस्वार अनुनासिक वीः शब्द बोलकर व छाँटकर कर तालिका में लिखिए ।* दुःख ,चाँद पंख, गाँव, कंगन, पुनः, चंदन, दंगल, जंगल, आँगन, अतः, नमः, बंदर, मांग, प्रातः, स्वतः, एवं, आँत, फलतः, अंततः, पुनः, प्रायः, रंग, कंचन, बाँसुरी, छः, वंश, चंचल, आँवला, ऊँट सायं, साँप, धुँआ, पाँच।
	DAY – 02(05.05.26) EVS - Monday - Activity Based Water Cycle Clay Model (Ch-1) Que- 1 Make a clay model showing: Sun, water body, clouds, mountains, rain (a) Label: Evaporation, Condensation, Precipitation, Collection (b) Write 4 steps of water cycle in your notebook.
1	ART - Class 5 – Art & Craft Homework 🎨 (a) Drawing & Shading with Pencil: Draw a village market scene and show proper light and dark shading neatly. _Frame your artwork on cardboard with black tape and cellophane sheet.
2	DAY – 03(6.05.26) HINDI + ENGLISH *H -worksheet 1* *Class-5th* *Reading Skill (पठन कौशल)* Writing Skill (लेखन कौशल) 1.वर्णमाला लिखिए। *स्वर कितने होते हैं? लिखिए। *अयोगवाह कितने होते हैं ?लिखिए। *स्पर्श व्यंजन कितने होते हैं? लिखिए।

*अन्तस्थ व्यंजन कितने होते हैं? लिखिए।

*उष्म व्यंजन कितने होते हैं? लिखिए।

*संयुक्त व्यंजन कितने होते हैं? लिखिए।

31 से 50 तक हिंदी में अंक वह शब्दों में गिनती लिखिए*

LEARN AND RECITE THE POEM (SPRING BY WILLIAM BLAKE)

3

MATHS + GK

Day 4 – Maths Worksheet

Name: _____ Date: _____



Section A: Numbers & Operations

1. Write in words:

a) 45,678 = _____

b) 3,25,910 = _____

2. Write in numerals:

a) Fifty-six thousand four hundred twelve = _____

b) Seven lakh three thousand nine = _____

3. Solve:

a) $4,567 + 3,289 =$ _____

b) $9,000 - 4,875 =$ _____

c) $245 \times 12 =$ _____

d) $1,248 \div 6 =$ _____

Section B: Fractions

4. Simplify:

a) $6/12 =$ _____

b) $15/25 =$ _____

5. Add:

a) $2/5 + 3/5 =$ _____

b) $1/4 + 2/4 =$ _____

6. Word Problem:

Riya ate $3/8$ of a pizza and her brother ate $2/8$.

How much pizza did they eat together? _____



Section C: Geometry

7. Identify the shape:

a) 4 equal sides and 4 right angles = _____

b) 3 sides = _____

8. Draw and name:

a) A rectangle

b) A triangle



Section D: Measurement

9. Convert:

a) 2 km = _____ m

b) 500 cm = _____ m

10. Word Problem:

A rope is 5 meters long. If you cut 2 meters, how much is left? _____



Section E: Money

11. Add:

$₹45.50 + ₹32.25 =$ _____

12. Word Problem:

You have ₹100. You buy a book for ₹65.

How much money is left? _____

Section F: Higher Order Thinking (HOTS)

13. Fill the missing number:

a) $45 \times \underline{\quad} = 450$

b) $\underline{\quad} \div 5 = 6$

14. Puzzle:

I am a number greater than 100 and less than 200.

I am divisible by 5 and 10.

What number am I? _____

Challenge Question

15. A shopkeeper has 120 apples. He packs them equally into 6 boxes.

How many apples are in each box? _____

GK – Multiple Choice Questions

1. Which is the largest planet in our solar system?

a) Earth

b) Mars

c) Jupiter

d) Venus

2. Who is known as the Father of the Nation in India?

a) Jawaharlal Nehru

b) Mahatma Gandhi

c) Subhas Chandra Bose

d) Bhagat Singh

3. Which animal is known as the “King of the Jungle”?

a) Tiger

b) Elephant

c) Lion

d) Leopard

4. What is the capital of India?

a) Mumbai

b) Delhi

c) Kolkata

d) Chennai

5. Which is the longest river in India?

a) Yamuna

b) Ganga

c) Godavari

d) Krishna

6. How many days are there in a leap year?

a) 365

b) 366

c) 364

d) 360

7. Which festival is known as the Festival of Lights?

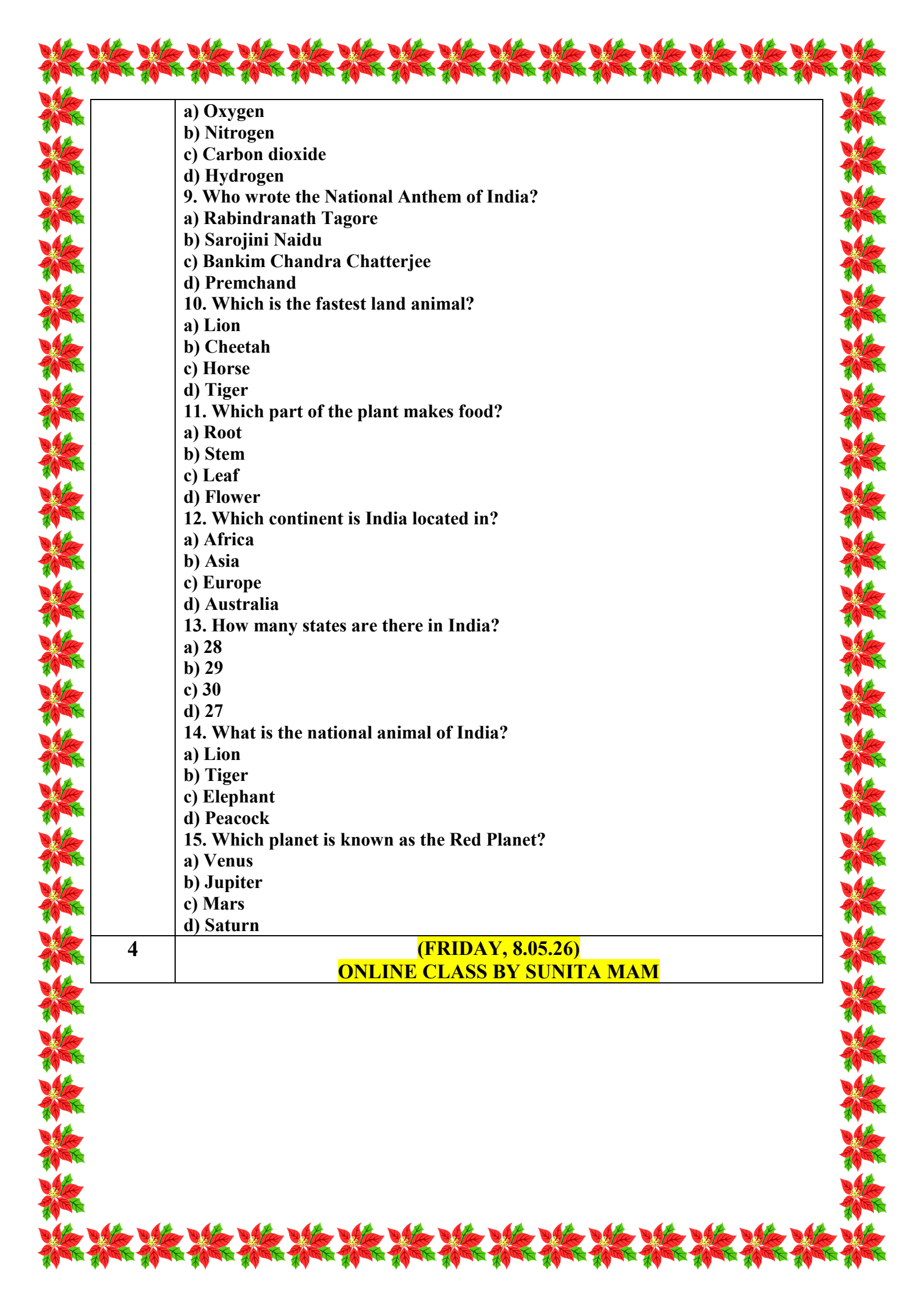
a) Holi

b) Diwali

c) Eid

d) Christmas

8. Which gas do plants take in from the air?

- 
- a) Oxygen
b) Nitrogen
c) Carbon dioxide
d) Hydrogen
9. Who wrote the National Anthem of India?
a) Rabindranath Tagore
b) Sarojini Naidu
c) Bankim Chandra Chatterjee
d) Premchand
10. Which is the fastest land animal?
a) Lion
b) Cheetah
c) Horse
d) Tiger
11. Which part of the plant makes food?
a) Root
b) Stem
c) Leaf
d) Flower
12. Which continent is India located in?
a) Africa
b) Asia
c) Europe
d) Australia
13. How many states are there in India?
a) 28
b) 29
c) 30
d) 27
14. What is the national animal of India?
a) Lion
b) Tiger
c) Elephant
d) Peacock
15. Which planet is known as the Red Planet?
a) Venus
b) Jupiter
c) Mars
d) Saturn

4

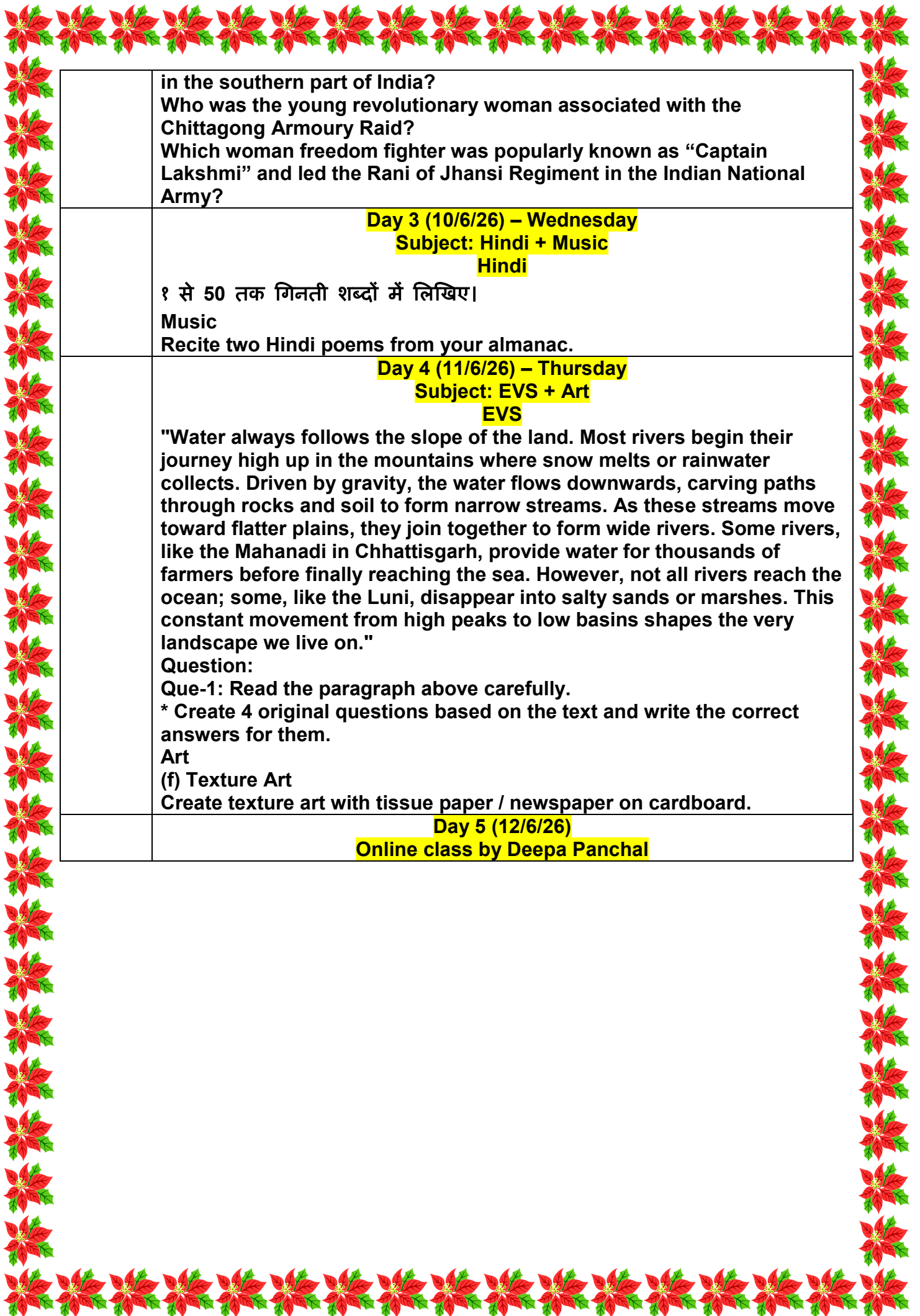
(FRIDAY, 8.05.26)
ONLINE CLASS BY SUNITA MAM

**JINDAL ADARSH BHARTI HR. SEC.
SCHOOL, KIRODIMAL NAGAR**



**SESSION – 2026-27
SUMMER VACATION
HOME WORK
CLASS – 5TH**

	WEEK - 06	DAY – 01 (MONDAY),	08.06.2026)
SNO.			
		DAY – 01 Art + Maths Art (f) Texture Collage – Feel the Surface Make a collage on chart paper using at least 5 different textures (sand, leaves, thread, foil, cloth, seeds, etc.) to create a scene. Label the textures neatly. Maths Day-7 – Outdoor Maths Trail (Maths Hunt Around Home/School) Activity: Maths Scavenger Hunt Students walk around home and hunt for maths in real objects. Task List (record in notebook): Find and note: 5 objects showing different angles (acute, right, obtuse, straight) 4 objects showing different shapes (circle, rectangle, cube, cylinder...) 3 examples of parallel lines and intersecting lines Estimate and then measure the length of any 3 objects (table, door, book) in cm/metre Find 2 objects that show symmetry._____.	
2		Day 2 (9/6/26) English + GK English Letters (Formal / Informal) GK Who is known as the “Nightingale of India” among women freedom fighters? Which woman freedom fighter hoisted the Indian national flag at the International Socialist Conference in Germany in 1907? Who was the first woman Governor of an Indian state and also a freedom fighter? Which brave queen of Jhansi fought against the British during the Revolt of 1857? Who was the wife of Mahatma Gandhi and actively participated in India’s freedom struggle? Which woman freedom fighter led the Quit India Movement in many places after the arrest of major leaders? Who was the first Indian woman president of the Indian National Congress and a freedom fighter? Which woman freedom fighter is remembered for leading the Salt March	



	<p>in the southern part of India? Who was the young revolutionary woman associated with the Chittagong Armoury Raid? Which woman freedom fighter was popularly known as “Captain Lakshmi” and led the Rani of Jhansi Regiment in the Indian National Army?</p>
	<p style="text-align: center;">Day 3 (10/6/26) – Wednesday Subject: Hindi + Music Hindi</p> <p>१ से 50 तक गिनती शब्दों में लिखिए। Music Recite two Hindi poems from your almanac.</p>
	<p style="text-align: center;">Day 4 (11/6/26) – Thursday Subject: EVS + Art EVS</p> <p>"Water always follows the slope of the land. Most rivers begin their journey high up in the mountains where snow melts or rainwater collects. Driven by gravity, the water flows downwards, carving paths through rocks and soil to form narrow streams. As these streams move toward flatter plains, they join together to form wide rivers. Some rivers, like the Mahanadi in Chhattisgarh, provide water for thousands of farmers before finally reaching the sea. However, not all rivers reach the ocean; some, like the Luni, disappear into salty sands or marshes. This constant movement from high peaks to low basins shapes the very landscape we live on."</p> <p>Question: Que-1: Read the paragraph above carefully. * Create 4 original questions based on the text and write the correct answers for them. Art (f) Texture Art Create texture art with tissue paper / newspaper on cardboard.</p>
	<p style="text-align: center;">Day 5 (12/6/26) Online class by Deepa Panchal</p>

**JINDAL ADARSH BHARTI HR. SEC.
SCHOOL, KIRODIMAL NAGAR**



**SESSION – 2026-27
SUMMER VACATION
HOME WORK
CLASS – 5TH**

WEEK - 02

DAY – 01 (MONDAY, 11.05.2026)

EVS + ART + MATHS

Week 2


11/5/26 to 15/6/26

Day 1

**Here is your  2nd Week Holiday Homework (Class 5 – CBSE)
neatly prepared without answers:**

 2nd Week Holiday Homework

Date: 11/05/26 to 15/05/26

 Day 1 (11/05/26)

EVS

Q1. Multiple Choice Questions (MCQs)

- (a) What percentage of Earth's water is fresh water?
a) 50% b) 10% c) 3% d) 1%
- (b) The process of water turning into vapour is called:
a) Precipitation b) Evaporation c) Condensation d) Filtration
- (c) What is primarily responsible for the water cycle?
a) Wind b) Sun c) Trees d) Animals
- (d) Which of the following is NOT a type of fresh water?
a) River b) Lake c) Ocean d) Pond
- (e) The water that soaks into the ground is called:
a) Surface water b) Groundwater c) Rainwater d) Tap water

Q2. Fill in the Blanks

- (a) The continuous movement of water from the Earth to the atmosphere and back is called the ____.
- (b) Water exists in three forms: solid, ____, and gas.
- (c) The process of converting water vapour into water droplets is called ____.
- (d) ____ helps in keeping the temperature of the earth cool.
- (e) ____ is a free-floating aquatic plant that spreads rapidly.

Q3. State True or False

- (a) Most of the Earth's water is freshwater. (____)
- (b) Water covers approximately 71% of the Earth's surface. (____)
- (c) Fish breathe underwater using gills. (____)
- (d) Rainwater harvesting is the technique of wasting water. (____)

Q4. Match the Following

Column A

Column B

1. Solid Water

A. Clouds

2. Condensation
B. Evaporation
3. Sun's Heat
C. Ice/Glaciers
4. Rain
D. Precipitation

🎨 Art Activity

Paper Craft (Papier-mâché / Newspaper Roll):

Make utensils or a vase using papier-mâché or tightly rolled newspaper.
(Use creativity and decorate neatly.)

Maths

Project Based Activity – Maths Around Us Scrapbook

Activity 1: Kitchen Measurement

Measure any five items from your kitchen using kg, litre, and metre (if possible).

Paste pictures or draw the items and record them in a scrapbook.

Item

Quantity

Unit

Activity 2: Weather Graph

For seven days, record the following:

Sunrise time

Sunset time

Daily temperature

Represent the temperature data using a bar graph in your notebook or scrapbook

DAY – 02 (12.05.26) ENGLISH + HINDI

📅 Day 2 (12/05/26)

(English work sheet Pdf will be provided Subject and predicate)

IN Hindi

H-Worksheet 3

Class – 5th

🗣️ Speaking Skill (मौखिक कौशल)

1. चित्र वर्णन:

दिए गए चित्र का वर्णन अपने शब्दों में कीजिए।

🗣️ मौखिक कौशल का ध्यान रखते हुए आकर्षक तरीके से बोलें।

🗣️ एक छोटा वीडियो बनाकर भेजें।

2. 'र' के विभिन्न प्रयोग:

'र' के अलग-अलग प्रयोग के साथ प्रत्येक के 10-10 शब्द बोलिए और लिखिए।

उदाहरण:

र (रकार) – कर्म

र (रेफ) – उम्र

र (पदेन) – ड्रम

3. विधि लेखन (Activity + Video):

आम / नींबू / तरबूज का रस (Juice) बनाने की विधि लिखिए।

🗣️ बनाते समय समझाइए और

📺 एक छोटा वीडियो बनाकर भेजिए।

DAY – 03 Evs + GK

Day 3 (13/05/26)



GK

General Knowledge – Fill in the Blanks

- The capital of India is _____.
- The largest planet in our solar system is _____.
- The national animal of India is _____.
- The festival of lights is called _____.
- India is located in the continent of _____.
- The fastest land animal is _____.
- The longest river in India is _____.
- The Father of the Nation of India is _____.
- The national bird of India is _____.
- Plants prepare their food in the _____.
- The Red Planet is _____.
- The national flower of India is _____.
- The currency of India is _____.
- There are _____ states in India.
- The gas essential for breathing is _____.



EVS

Wednesday – Case Based

In a small village of Chhattisgarh, people depend on wells and hand pumps for water. During summer, many wells dry up and hand pumps stop working properly. Farmers face problems because crops do not get enough water. The main reasons for water scarcity are overuse of groundwater, cutting of trees, and lack of rainwater harvesting. Due to shortage of clean water, people sometimes fall sick. Women and children have to walk long distances to bring water.

To solve this problem, villagers started saving water, planting trees, and collecting rainwater. Slowly, the water level began to improve.

Questions:

- What were the main reasons for water scarcity in the village?
- How did the shortage of water affect the daily life of people and farmers?
- What steps did the villagers take to improve the water level?

Day – 04 (Maths + Art)

Day 4 – Maths + Art

Date: 14/05/26

÷ Maths – Game Based Learning

🎲 Game: Roll & Make a Fraction

Materials:

2 Dice

Notebook

How to Play:

Roll two dice.

Take the smaller number as the numerator.

Take the larger number as the denominator.

Form a fraction.

Write the fraction in its simplest form.

Repeat the activity 10 times.

 **Task Sheet:**

Write all 10 fractions.

Circle the proper fractions.

Put a ★ on fractions greater than $\frac{1}{2}$.

 **Case Study**

Que (1):

Students of Class 5 went for a picnic. They left school at 8:15 a.m. and reached the park at 9:05 a.m. The temperature in the morning was 22°C . By afternoon, the temperature rose to 34°C .

Questions:

(a) How much time did students take to reach the park?

(b) What was the increase in temperature from morning to afternoon?

(c) If they returned at 3:40 p.m. and reached school at 4:25 p.m., how long was the return journey?

(d) For how many hours and minutes were they at the park?

 **Art**

 **(c) My Wall Hanging**

Create a decorative wall hanging using:

Threads

Beads

Cardboard

Fabric pieces

 **Use your creativity and make it colorful and attractive.**

DAY – 05(15.05.26) Online class by Deepa Panchal

**JINDAL ADARSH BHARTI HR. SEC.
SCHOOL, KIRODIMAL NAGAR**



**SESSION – 2026-27
SUMMER VACATION
HOME WORK
CLASS – 5TH**

WEEK - 03

DAY – 01 (MONDAY ,

18.05.2026)

SNO.

Hindi + Value Education

■ Day 1 (18/05/26)

Value Education & Hindi

✿ Value Education

■ Value-Based MCQs

1. You see your friend throwing garbage on the road. What should you do?
 - a) Ignore it
 - b) Do the same
 - c) Tell your friend to use a dustbin
 - d) Walk away
2. You find a wallet on the school ground. What will you do?
 - a) Keep it
 - b) Give it to your teacher
 - c) Throw it away
 - d) Hide it
3. Your classmate is feeling sad. What should you do?
 - a) Laugh at them
 - b) Ignore them
 - c) Help and talk to them
 - d) Tell others to tease them
4. You forgot to do your homework. What is the right action?
 - a) Tell a lie
 - b) Copy from a friend
 - c) Accept your mistake
 - d) Skip school
5. You see someone wasting water. What should you do?
 - a) Ignore
 - b) Waste more water
 - c) Stop them politely
 - d) Laugh
6. Your friend cheats in a test. What should you do?
 - a) Copy from them
 - b) Ignore it

- c) Encourage them
d) Advise them not to cheat
7. You are standing in a queue and someone pushes ahead. What will you do?
a) Push back
b) Fight
c) Politely ask them to follow the line
d) Leave the queue
8. You have extra food at lunch. What should you do?
a) Throw it
b) Share with others
c) Hide it
d) Waste it
9. You see a plant drying due to lack of water. What will you do?
a) Ignore
b) Break it
c) Water the plant
d) Step on it
10. Your younger sibling needs help with homework. What will you do?
a) Ignore
b) Scold them
c) Help them patiently
d) Do your own work only

IN Hindi

H-Worksheet 4 Class – 5th

🎧 Listening Skill (श्रवण कौशल)

1. संज्ञा किसे कहते हैं? लिखिए।

2. दी गई कहानी किसी से पढ़वाएं तथा कहानी से सुनकर संज्ञा शब्द छाँटकर लिखिए।

एक दिन रीना अपने परिवार के साथ पार्क में गई। पार्क में बहुत सुंदर फूल और हरे भरे पेड़ थे। वहां कुछ लोग बेंच पर बैठकर बातें कर रहे थे। रीना ने अपने भाई राहुल के साथ गेंद खेली। शाम को सब लोग घर लौट कर आए और खुशी-खुशी अपना दिन बिताया।

3. आपको एक कहानी भेजी जाएगी, उसे सुनकर लिखिए –

उसके मुख्य पात्रों के नाम।

कुल कितने पात्र हैं?

कहानी का शीर्षक।

कहानी से आपने क्या सीखा?

कहानी से आपने जो सीख उसमें से हमें क्या नहीं करने की सीख मिलती है?

DAY – 02 (19.05.26)

ENGLISH + ART

🌟 Class 5 – Holiday Homework

📅 Day 2 – 19/05/2026

✍️ English + Art

📖 English

📄 Creative Writing

Write a composition on the topic:

👉 “A Day Without Gadgets and Internet”

🔑 Instructions:

Write in neat handwriting

Use simple and meaningful sentences

Give a suitable title

Keep your writing within 100–150 words

🎨 Art

● (d) Mandala Art

Draw a neat mandala design

Use balanced patterns and fine detailing

You may use pencil and colors

🔑 Presentation:

Keep the design clean and symmetrical

Highlight patterns carefully.

DAY – 03 EVS + HINDI

Day 3 (20/05/2026)

🌍 EVS + Hindi

🌿 EVS

🗺️ Friday – Map Based

(a) Which river is called the lifeline of Chhattisgarh?

(b) Identify and label River Mahanadi and five major rivers that flow in Chhattisgarh on a map.

(c) How does Mahanadi help farmers?

(d) How can we keep rivers clean?

📖 Hindi

H-Worksheet 4

Class-5th

Writing Skill (लेखन कौशल)

2. गर्मी के मौसम में पशु पक्षी पेड़ पौधे जीव जंतुओं को आप किस तरह की समस्याओं का सामना करते हुए देखते हैं? उनके बचाव के लिए आप क्या-क्या उपाय सुझा सकते हैं। एक सूची बनाकर समझाइए तथा उपाय लिखिए ।

1

DAY – 04 (21.05.26) MATHS + ENGLISH Day 4 – 21/05/2026

📊 Maths + English

📖 English

? Quiz

Attempt the given English Quiz

Read each question carefully before answering

Write answers neatly

÷ Maths

📅 Thursday – Model Based Learning

Que. (1)

Make models of 2D and 3D shapes or different types of angles using:

Chart paper

Thermocol

Ice-cream sticks

Straws

Paper plates, etc.

Que. (2)

Make a working model of a clock showing:

Hour hand

Minute hand

🏠 Mini Shop Activity

Task:

Set up a pretend shop at home (snacks, stationery, toys)

Make price tags in ₹

A family member will act as the customer

Write in Notebook:

5 bills you made

Total amount of each bill

Balance returned to the customer

📖 Que. (3) – Case Study

A train left the station at 11:45 p.m. The temperature outside was 27°C. The next morning at 5:15 a.m., the temperature was 19°C.

Questions:

How long was the train journey till morning?

What was the change in temperature?

Did the temperature increase or decrease? By how much?

2

DAY – 05 (22.05.26) ONLINE CLASS BY BHOO MIKA GUPTA TULYSYAN

**JINDAL ADARSH BHARTI HR. SEC.
SCHOOL, KIRODIMAL NAGAR**



**SESSION – 2026-27
SUMMER VACATION
HOME WORK
CLASS – 5TH**

WEEK - 04 DAY – 01 (MONDAY , 25.05.2026)

EVS + ART Education

Day 1 (25/05/26)

Knowledge Based:-

Aquatic plants and animals live in water, so their bodies have special features called adaptations that help them survive there. These adaptations allow them to move easily, breathe properly, and protect their bodies from damage in a watery environment. Without such features, they would not be able to live in water for long. By studying these adaptations, we understand how living things adjust to their surroundings.

Choose one aquatic animal such as Fish or Duck, and one aquatic plant such as Lotus.

(a) Write one paragraph for the animal and one paragraph for the plant explaining:

(b) Their special physical features (adaptations)

(c) How these features help them live in water

(d) How they breathe/survive without drowning or rotting

ART -:

d) Mandala Art:

Draw a neat mandala design with balanced patterns and fine detailing

DAY – 02 (26.05.26)

MATHS + GK

Wednesday* – Game Based Learning

Game: Roll & Make a Fraction

Materials: 2 dice, notebook

How to Play

Roll two dice.

Smaller number = numerator, larger number = denominator.

Write the fraction in simplest form.

Repeat 10 times.

Task Sheet

Write all 10 fractions.

Circle the proper fractions.

Put a ★ on fractions greater than $\frac{1}{2}$.

Case Study -

Que(1) - Students of Class 5 went for a picnic. They left school at 8:15 a.m. and reached the park at 9:05 a.m. The temperature in the morning was 22°C. By afternoon, the temperature rose to 34°C.

Questions:

How much time did students take to reach the park?
What was the increase in temperature from morning to afternoon?
If they returned at 3:40 p.m. and reached school at 4:25 p.m., how long was the return journey?
For how many hours and minutes were they at the park?

The capital of India is _____.
The largest planet in our solar system is _____.
The national bird of India is _____.
The longest river in the world is _____.
The festival of lights is called _____.
The father of the nation of India is _____.
The tallest mountain in the world is _____.
The currency of India is _____.
The first Prime Minister of India was _____.
The process by which plants make their food is called _____.

Hindi - : अपने प्राचार्य जी को तीन दिन की अवकाश हेतु आवेदन पत्र लिखिए।
अपने कक्षा शिक्षिका को अर्ध अवकाश हेतु आवेदन पत्र लिखिए।

DAY - 05 (22.05.26) ONLINE CLASS BY BHOOMIKA MAM

Day 3 (27/5/26) Wednesday

Hindi +Art

निबंध लेखन (200 शब्द में)

- 1 - ग्रीष्म ऋतु
- 2 - वर्षा ऋतु
- 3 - विद्यालय में मेरा पहला दिन

Note :- Write in your Vyakaran copy

Art:

(e) Lippan art:

Create a small Lippan art design using clay and mirrors on a cardboard base.

Day 4 (28/05/2026) – Thursday

Subjects: English + GK

English

Spell Bee

GK

Who was called the Father of the Nation in India?

Who gave the slogan “Do or Die” during the Quit India Movement?

Who was the first Prime Minister of independent India?

Who founded the Azad Hind Fauj (Indian National Army)?

Who was known as the Iron Man of India?

Who gave the slogan “Swaraj is my birthright and I shall have it”?

Who was the first woman president of the Indian National Congress?

Who led the Dandi March (Salt March) in 1930?

Who was known as Punjab Kesari?

Who was the social reformer and freedom fighter known as Lokmanya Tilak?

Online class by Shraddha S Bohidar

**JINDAL ADARSH BHARTI HR. SEC.
SCHOOL, KIRODIMAL NAGAR**



**SESSION – 2026-27
SUMMER VACATION
HOME WORK
CLASS – 5TH**

	WEEK - 05	DAY – 01 (MONDAY ,	01.06.2026)
SNO.			
	GK + EVS Who was the founder of the Mughal Empire in India? Which emperor built the Taj Mahal? Who was known as the greatest emperor of the Mughal Empire? Which emperor introduced Din-i-Ilahi? Who was the last Mughal emperor of India? Which Mauryan emperor spread Buddhism after the Kalinga War? Who was the founder of the Maurya Empire? Which Gupta emperor was known as the Napoleon of India? Who was the famous king of the Vijayanagara Empire during its golden age? Which emperor shifted the capital from Agra to Delhi and built the Red Fort? Project based Topic: Importance of Water for Living Beings (a) How do plants, animals, and humans use water differently? (b) Draw or paste pictures showing their uses. (c) What will happen if water is not available? [10:58 am, 28/04/2026] Shraddha Bohidar: Here is your homework arranged neatly and systematically:		
	DAY – 02 (2.06.26) Hindi + Art कक्षा का वातावरण हमारी कक्षा सीखने का एक सुंदर स्थान है। कक्षा में सभी विद्यार्थी मिल-जुलकर पढ़ाई करते हैं। शिक्षक हमें प्यार से पढ़ाते हैं और नई-नई बातें सिखाते हैं। कक्षा में साफ-सफाई का विशेष ध्यान रखा जाता है। दीवारों पर सुंदर चार्ट और चित्र लगे होते हैं, जो पढ़ाई को रोचक बनाते हैं। हम सभी समय पर गृहकार्य पूरा करते हैं और अनुशासन का पालन करते हैं। कक्षा में शांति और सहयोग का वातावरण रहता है। हमें अपनी कक्षा पर गर्व है। Note: विद्यार्थी इस अनुच्छेद से पाँच प्रश्न (खुद से) बनाकर उनके उत्तर लिखेंगे। Art Thread Geometry Art (String Design) Create a geometric pattern by wrapping coloured thread around pins on a cardboard base. Ensure the design is neat and clearly visible._____.		
2	DAY – 03 (03.06.26) English + Music Recite any 2 English prayers from your almanac.		

Day- 04 (4/6/26)
Maths + Value Education
Maths

Data Handling Day (Family Survey & Pictograph)

Activity: My Family Data Survey

Students take a small survey of 10 people (family/neighbours/friends).

Choose any one survey topic:

Favourite fruit

Favourite game

Favourite subject

Favourite colour

Step-1: Record data in tally marks

Choice –

Tally –

Number –

Value Education

Value-Based Case Study

Case Study: Helping Others

Sita was going to school when she saw an old woman trying to cross the road. Many people passed by, but no one stopped to help. Sita quickly went to the old woman, held her hand, and helped her cross the road safely. The old woman smiled and thanked Sita for her kindness.

Sita felt happy because she had helped someone in need.

Questions:

Where was Sita going?

Whom did Sita see on the road?

What problem was the old woman facing?

How did Sita help the old woman?

Which values are shown by Sita in this case study?

Day 5 (5/6/26) Friday
Online class by visha Patnaik